





CAN YOU TAKE
ME TO THE
STORE, ANTE?
I JUST GOTTA
HAVE THAT GAME!

HOLD ON SCORPY, DO
YOU HAVE ENOUGH
MONEY SAVED FOR A
GAME RIGHT NOW?



SURE, I HAVE SOME
SILVER AND COPPERS.







THOSE ARE
NICKELS, DIMES,
QUARTERS AND
PENNIES! THOSE
ARE ALL COINS
THAT ADD UP TO
MAKE A DOLLAR.

SO HOW
MUCH MONEY
DO I HAVE?

THERE'S A SPECIAL WAY TO COUNT COINS, BUT
FIRST WE NEED TO LEARN WHAT THE DIFFERENT
COINS ARE AND HOW MUCH THEY'RE WORTH.


ALRIGHT!
SHOW ME
THE MONEY!






I HAVE ALL OF THESE COINS, BUT HOW MUCH MONEY DO I ACTUALLY HAVE?

WELL, SCORPY, WE HAVE TO COUNT THEM FIRST.




A PENNY IS WORTH ONE CENT AND A NICKEL IS WORTH FIVE CENTS. SO FIVE PENNIES ARE EQUAL TO ONE NICKEL.



A DIME IS WORTH TEN CENTS, SO TEN PENNIES ARE EQUAL TO ONE DIME. ALSO, TWO NICKELS ARE EQUAL TO A DIME.

BECAUSE FIVE PLUS FIVE EQUALS TEN!



FINALLY WE HAVE A QUARTER WHICH IS WORTH 25 CENTS. THAT'S 25 PENNIES.

OR TWO DIMES AND A NICKEL!

